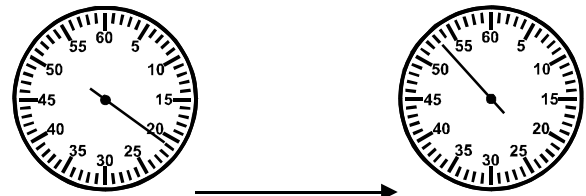
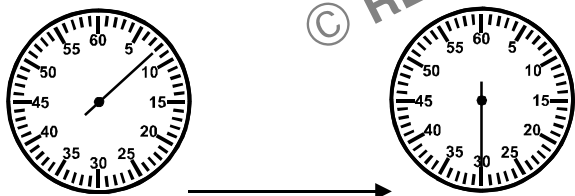
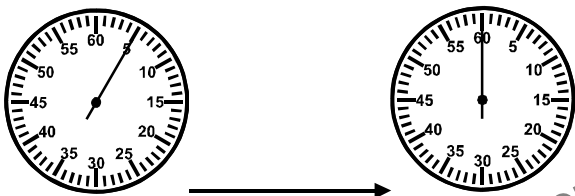
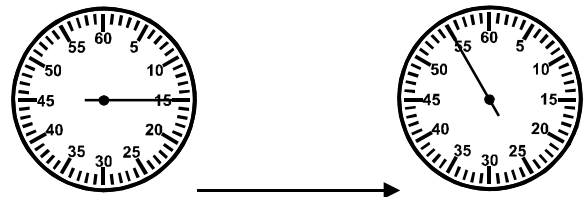
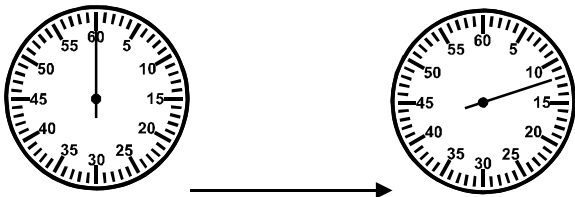
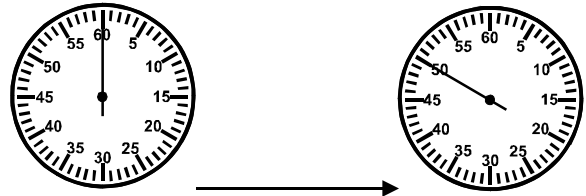
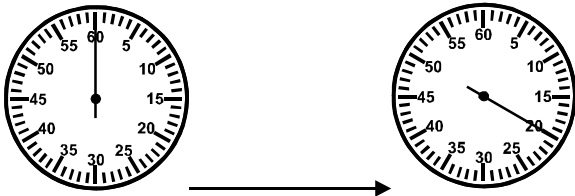


Zeitspannen berechnen – Sekunden 2

Wie viele Sekunden sind auf der Stoppuhr vergangen?



© REPO - Lern- und Lehrmedien

Bestimme Beginn oder Ende!

Sieger	Abstand	Letzter
18 Sek.	2 Sekunden	
	10 Sekunden	20 Sek.
	20 Sekunden	80 Sek.
	5 Sekunden	75 Sek.
22 Sek.	18 Sekunden	
13 Sek.	25 Sekunden	
25 Sek.	44 Sekunden	

Sieger	Abstand	Letzter
14 Sek.	45 Sekunden	
20 Sek.	80 Sekunden	
	75 Sekunden	120 Sek.
	60 Sekunden	180 Sek.
	14 Sekunden	200 Sek.
	120 Sekunden	500 Sek.
	8 Sekunden	220 Sek.