





Rechnen mit Geld



5 €



1 €



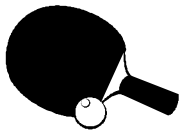
9 €



16 __



10 __



5 €

+



1 €

=

__ €



__ €

+



€

=

_____ €



_____ €

+



__ €


=

_____ €



_____ €

+



__ €

=

_____ €