


Übung 52


Name: \_\_\_\_\_

Zeichne den Stundenzeiger (kleiner Zeiger) **rot** ein und den Minutenzeiger (großer Zeiger) in **blau** ein!

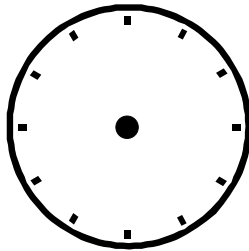
13 Uhr




8 Uhr und  
30 Minuten



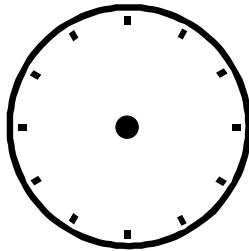
19 Uhr und  
45 Minuten



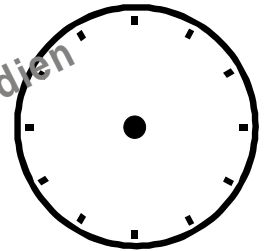
16 Uhr und  
15 Minuten




11 Uhr und  
30 Minuten



18 Uhr



14 Uhr und  
15 Minuten



10 Uhr und  
45 Minuten

