



Übung 15

Name: _____


Ordne die richtige Uhrzeit zu!




- 10.00
- 01.00
- 12.00
- 11.00




- 02.00
- 03.00
- 04.00
- 01.00




- 06.00
- 12.00
- 05.00
- 07.00




- 10.00
- 09.00
- 08.00
- 07.00




- 12.00
- 11.00
- 01.00
- 10.00



- 03.00
- 12.00
- 02.00
- 01.00



- 07.00
- 09.00
- 06.00
- 08.00



- 02.00
- 01.00
- 03.00
- 12.00

