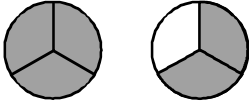



# Übung 17

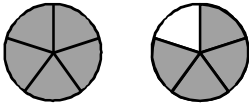

Name: \_\_\_\_\_

Multipliziere folgende gemischte Zahlen, markiere dein Ergebnis farbig und wandle den unechten Bruch um.


 $\cdot 3 \rightarrow$ 


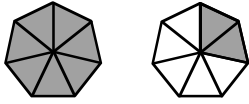
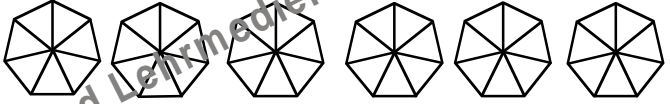
$1 \frac{2}{3} \cdot 3 \rightarrow \boxed{\quad} = \boxed{\quad}$

---


 $\cdot 3 \rightarrow$ 


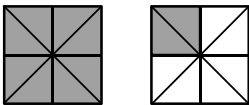

$1 \frac{4}{5} \cdot 3 \rightarrow \boxed{\quad} = \boxed{\quad}$

---


 $\cdot 4 \rightarrow$ 


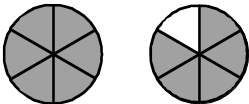

$1 \frac{2}{7} \cdot 4 \rightarrow \boxed{\quad} = \boxed{\quad}$

---


 $\cdot 5 \rightarrow$ 


$1 \frac{2}{8} \cdot 5 \rightarrow \boxed{\quad} = \boxed{\quad}$

---


 $\cdot 3 \rightarrow$ 


$1 \frac{5}{6} \cdot 3 \rightarrow \boxed{\quad} = \boxed{\quad}$