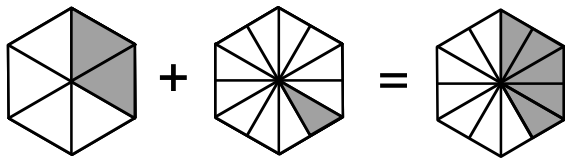
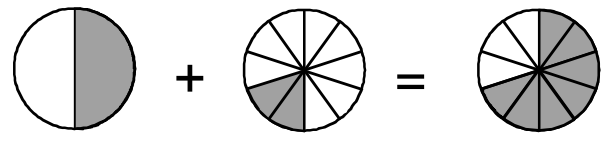


## Übung 23 - Addition

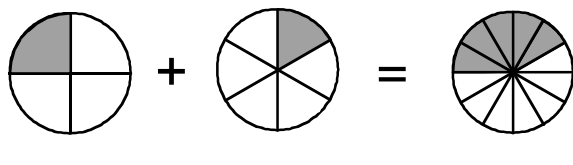
Addiere die dargestellten ungleichnamigen Brüche. Die Zeichnungen helfen dir dabei.



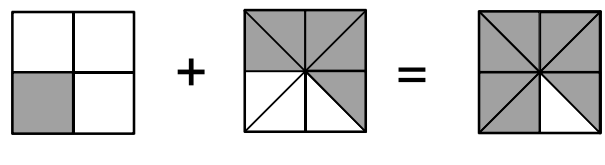
$$\frac{2}{6} + \frac{1}{12} = \boxed{\quad}$$



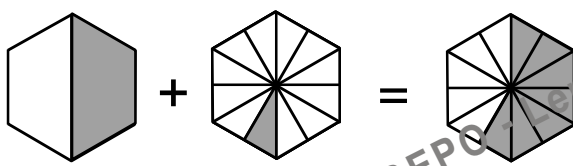
$$\frac{1}{2} + \frac{2}{10} = \boxed{\quad}$$



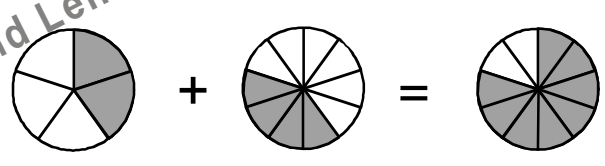
$$\frac{1}{4} + \frac{1}{6} = \boxed{\quad}$$



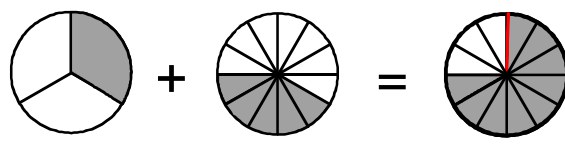
$$\frac{1}{4} + \frac{5}{8} = \boxed{\quad}$$



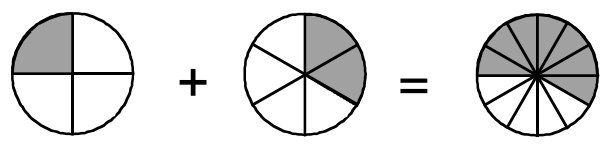
$$\frac{1}{2} + \frac{1}{12} = \boxed{\quad}$$



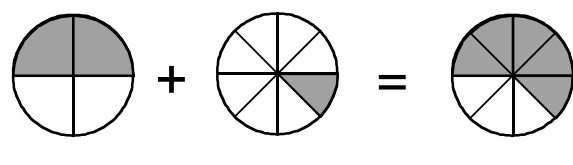
$$\frac{2}{5} + \frac{4}{10} = \boxed{\quad}$$



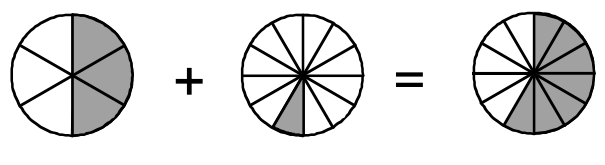
$$\frac{1}{3} + \frac{5}{12} = \boxed{\quad}$$



$$\frac{1}{4} + \frac{2}{6} = \boxed{\quad}$$



$$\frac{2}{4} + \frac{1}{8} = \boxed{\quad}$$



$$\frac{3}{6} + \frac{1}{12} = \boxed{\quad}$$