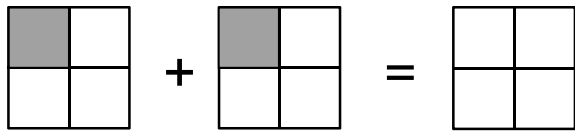



Übung 15 - Addition

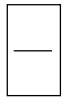

Addiere die dargestellten Brüche. Rechne aus und zeichne dein Ergebnis farbig ein.



+



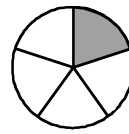
=



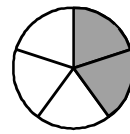
+



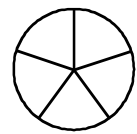
=



+



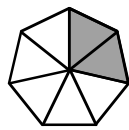
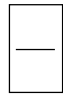
=



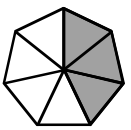
+



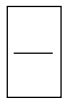
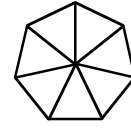
=



+



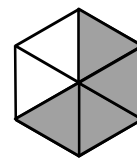
=



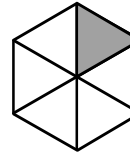
+



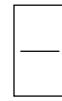
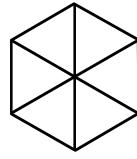
=



+



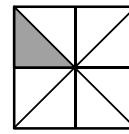
=



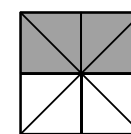
+



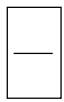
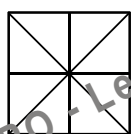
=



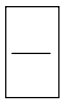
+



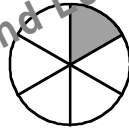
=



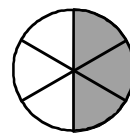
+



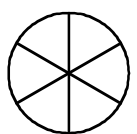
=



+



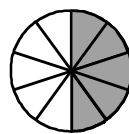
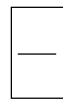
=



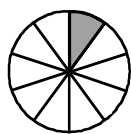
+



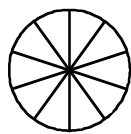
=



+



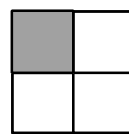
=



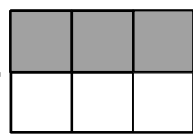
+



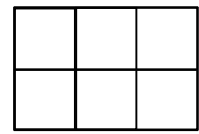
=



+



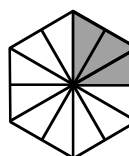
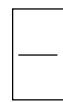
=



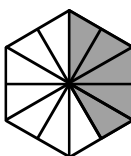
+



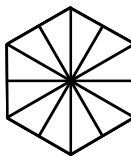
=



+



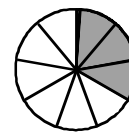
=



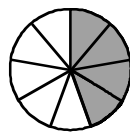
+



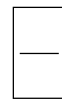
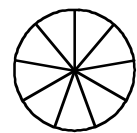
=



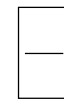
+



=



+



=

