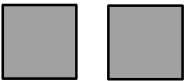
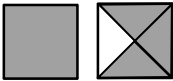


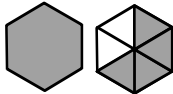
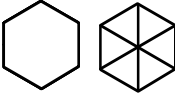


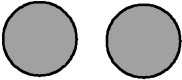

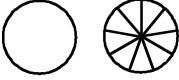
- Übung 23 -

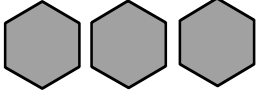
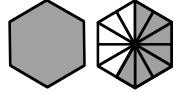
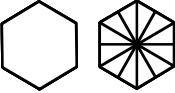
Subtrahiere folgende Zahlen. Wandle die ganzen Zahlen und die gemischten Zahlen in unechte Brüche um und subtrahiere die Brüche. Rechne aus und markiere dein Ergebnis farbig.



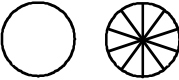
Beispiel:

	-		=	
2	-	$1 \frac{3}{4}$	=	$\frac{1}{4}$

	-		=	
\square	-	\square	=	\square

	-		=	
\square	-	\square	=	\square

	-		=	
\square	-	\square	=	\square

	-		=	
\square	-	\square	=	\square