
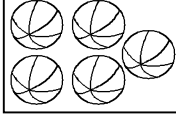



- Übung 34 -

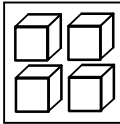
Zeichne den angegebenen Bruchteil als Teilmenge ein!

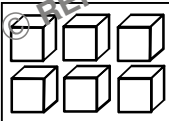
Beispiel:


$$\frac{2}{4} =$$


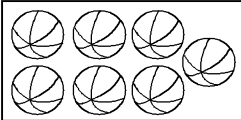
$$\frac{1}{5} =$$



$$\frac{2}{7} =$$


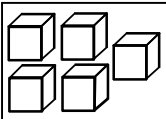
$$\frac{3}{4} =$$


$$\frac{3}{6} =$$


$$\frac{4}{8} =$$


$$\frac{4}{7} =$$


$$\frac{2}{6} =$$


$$\frac{4}{5} =$$


$$\frac{5}{7} =$$
