


Übung 31


Name: _____

Zeichne den Stundenzeiger (kleiner Zeiger) in rot ein.


3 Uhr und
15 Minuten



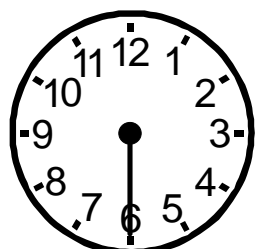
8 Uhr



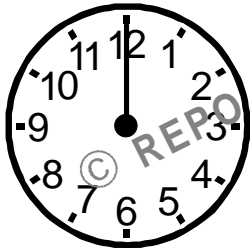
6 Uhr und
45 Minuten




11 Uhr und
30 Minuten





4 Uhr



1 Uhr und
15 Minuten



10 Uhr und
15 Minuten



9 Uhr und
45 Minuten

