


Übung 17


Name: _____

Zeichne den Stundenzeiger (kleiner Zeiger) in rot ein.


10 Uhr




7 Uhr




3 Uhr




11 Uhr




12 Uhr



1 Uhr



2 Uhr



8 Uhr

