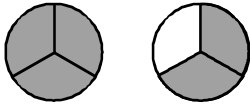



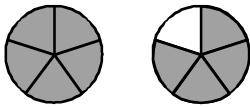
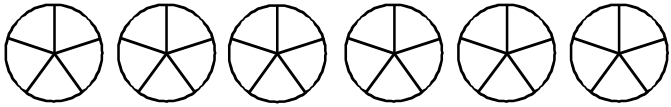
Übung 17

Name: _____

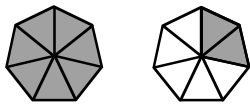
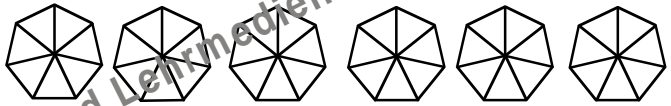
Multipliziere folgende gemischte Zahlen, markiere dein Ergebnis farbig und wandle den unechten Bruch um.


 $\cdot 3 \rightarrow$


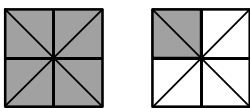
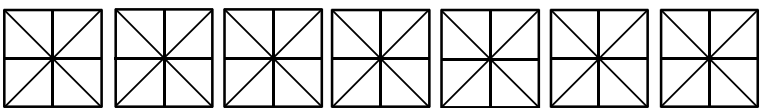
$1 \frac{2}{3} \cdot 3 \rightarrow \boxed{\quad} = \boxed{\quad}$


 $\cdot 3 \rightarrow$


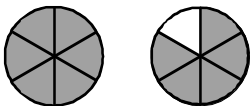
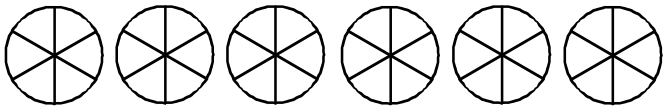
$1 \frac{4}{5} \cdot 3 \rightarrow \boxed{\quad} = \boxed{\quad}$


 $\cdot 4 \rightarrow$


$1 \frac{2}{7} \cdot 4 \rightarrow \boxed{\quad} = \boxed{\quad}$


 $\cdot 5 \rightarrow$


$1 \frac{2}{8} \cdot 5 \rightarrow \boxed{\quad} = \boxed{\quad}$


 $\cdot 3 \rightarrow$


$1 \frac{5}{6} \cdot 3 \rightarrow \boxed{\quad} = \boxed{\quad}$