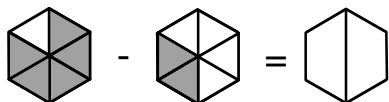


- Übung 42 -

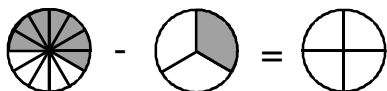
Subtrahiere die dargestellten Brüche. Rechne aus und zeichne den Restbruchteil farbig ein.



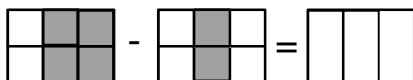
$$\square - \square = \square$$



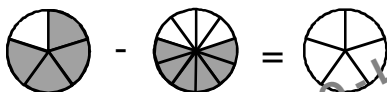
$$\square - \square = \square$$



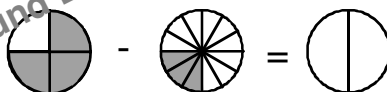
$$\square - \square = \square$$



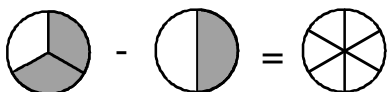
$$\square - \square = \square$$



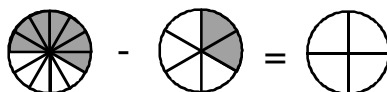
$$\square - \square = \square$$



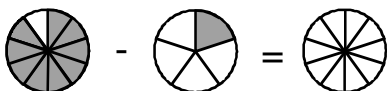
$$\square - \square = \square$$



$$\square - \square = \square$$



$$\square - \square = \square$$



$$\square - \square = \square$$



$$\square - \square = \square$$